

SANSKAR SCHOOL

GRADE- I

Assignment 38

Date: Thursday, 11th March 2021

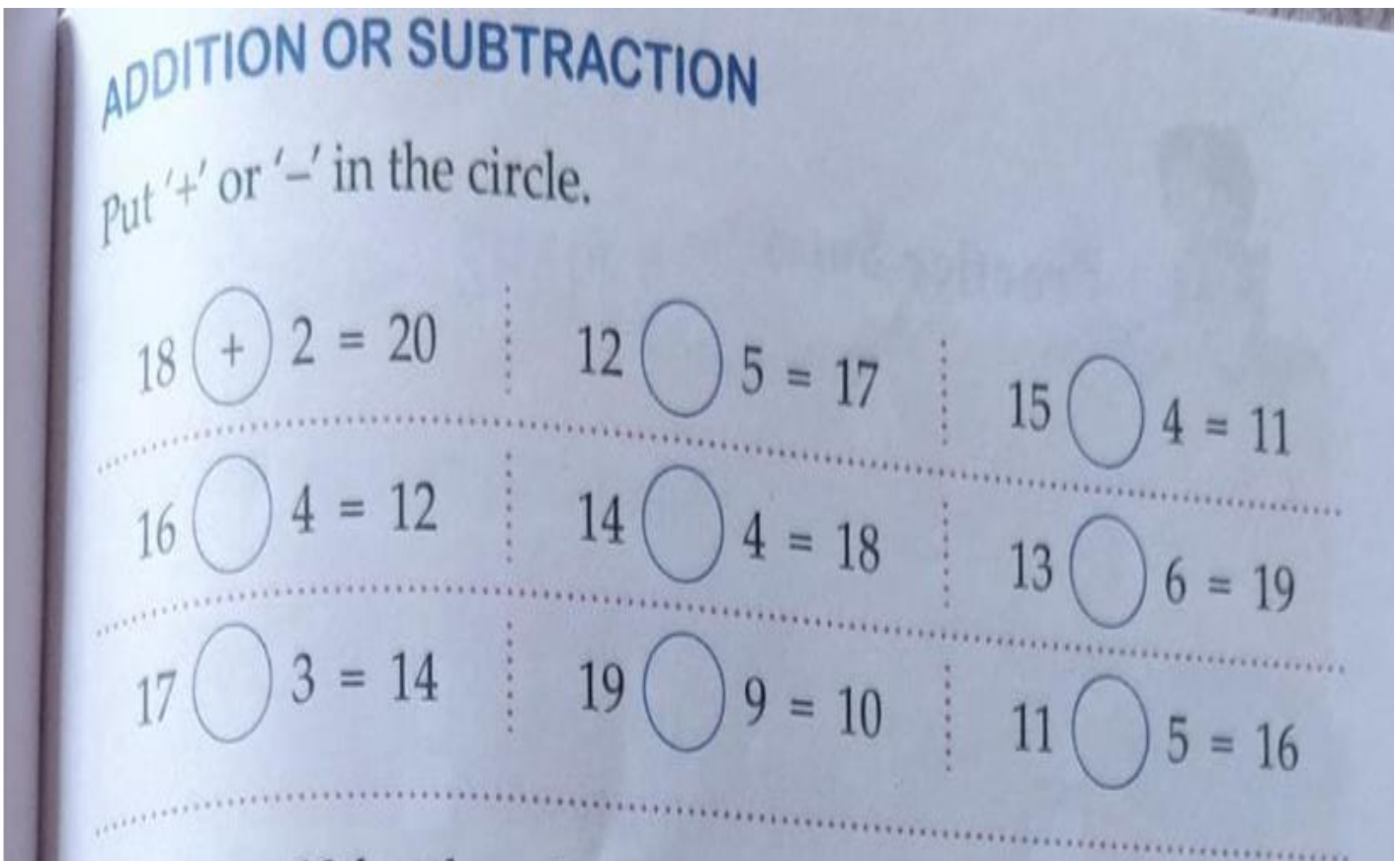
ENGLISH:

Creative writing-

Topic-My family (Write 5-8 lines on the given topic)

MATHS:

Do pages 60 and 61 in maths book.



There are 12 bottles of mango jam and 6 bottles of apple jam in the shop.



There are _____ jam bottles in the shop.

$12 \bigcirc 6 = \square$

Raj had 16 colour pencils with him.
He gave 3 colour pencils to his friend.



Raj has _____ colour pencils left with him.

$16 \bigcirc 3 = \square$

There are 5 bottles of cola and 7 bottles of orange in the crate.



There are _____ bottles in the crate.

$5 \bigcirc 7 = \square$

Values to Learn

A fruit seller had 18 bananas with him.
5 were rotten. He threw away the rotten ones.



He has _____ bananas left with him.

$18 \bigcirc 5 = \square$

SUBTRACTION STORIES

Sahil had 18 chocolates with him.

He gave 5 chocolates to his friend.

Sahil has _____ chocolates left with him.



-

There were 16 birds sitting on a tree.

3 birds flew away.

There are _____ birds left on the tree.




-

There were 15 eggs in a tray.

5 eggs fell down and broke.

There are _____ eggs left in the tray.



-



Play Time

Play this game with your partner.

You need 20 buttons each and a dice.

Roll the dice and see the number. Give as many buttons to your partner.

Your partner rolls the dice and sees the number.

You get as many buttons back.

Keep on playing.

If at some point, a player does not have enough buttons to give to the partner, he or she waits for the next turn.


The player whose buttons are finished first is the winner.



HINDI:

दिए गए गद्यांश को पढ़कर प्रश्नों के उत्तर दो-

आज सभी जानवर बहुत खुश थे। वे मेला देखने जा रहे थे। शेर भी बनठन गया। सबने मिलकर जलेबी खाई। ठेले पर केले, सेब भी बिक रहे थे। हाथी ने केले ही केले उड़ाए। शेर सबके साथ रेल पर सवार हुआ। रेलगाड़ी चली छुक-छुक-छुक। सब जानवर खूब घूमे और वापस वन आ गए।



प्रश्न1- सभी जानवर कहाँ जा रहे थे?

उत्तर-

प्रश्न2- सबने मिलकर क्या खाया?

उत्तर-

प्रश्न3- ठेले पर क्या बिक रहे थे?

उत्तर-

प्रश्न4- सबके साथ कौन रेल पर सवार हुआ?

उत्तर-

ART:

Summative assessment

Learners will draw and color sources of light (natural and man-made) and write reflection about their artwork.

Criteria for assessment

*Choice of Drawing

*Craftsmanship

*Creativity

P.E.:

Summative Assessment

Write/draw/record a clip about use of sound in games/sports through a mind map

Criteria of assessment



Check list

1. Relevant information
2. Demonstrate thinking skills
3. Neat Presentation
4. Timely submission (1 Week)

DANCE:

Watch the video and do some warm-up exercises.

<https://youtu.be/PMAHDOvtVMo>